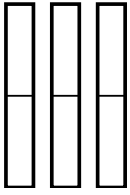


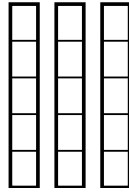


Use the visual models to solve.

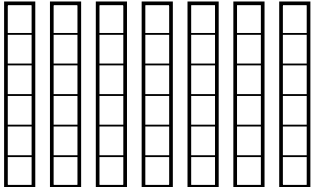
1)  $\frac{1}{2} \times 3 =$



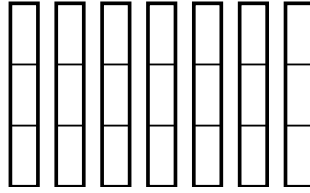
2)  $\frac{3}{5} \times 3 =$



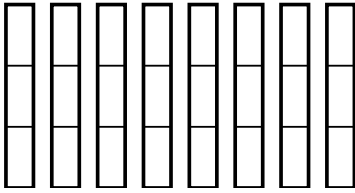
3)  $\frac{5}{6} \times 7 =$



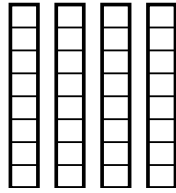
4)  $\frac{2}{3} \times 7 =$




5)  $\frac{2}{3} \times 8 =$



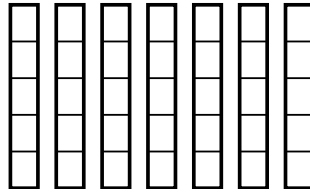
6)  $\frac{7}{8} \times 4 =$



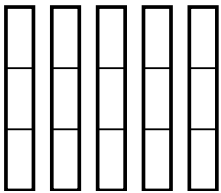
7)  $\frac{1}{4} \times 8 =$



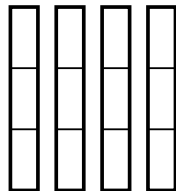
8)  $\frac{3}{5} \times 7 =$



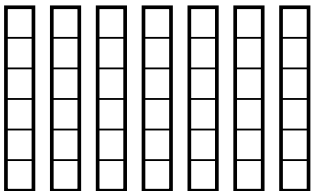
9)  $\frac{2}{3} \times 5 =$



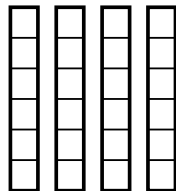
10)  $\frac{2}{3} \times 4 =$



11)  $\frac{2}{6} \times 7 =$



12)  $\frac{1}{6} \times 4 =$



**Answers**

1. \_\_\_\_\_

2. \_\_\_\_\_

3. \_\_\_\_\_

4. \_\_\_\_\_

5. \_\_\_\_\_

6. \_\_\_\_\_

7. \_\_\_\_\_

8. \_\_\_\_\_

9. \_\_\_\_\_

10. \_\_\_\_\_

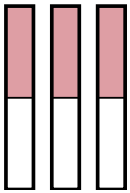
11. \_\_\_\_\_

12. \_\_\_\_\_

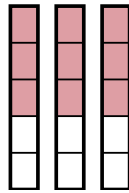


Use the visual models to solve.

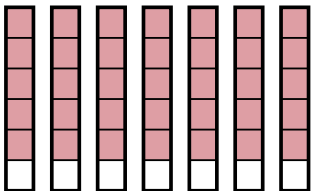
1)  $\frac{1}{2} \times 3 =$



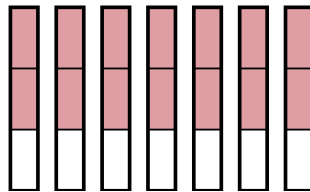
2)  $\frac{3}{5} \times 3 =$



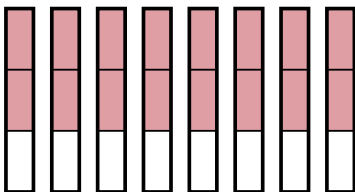
3)  $\frac{5}{6} \times 7 =$



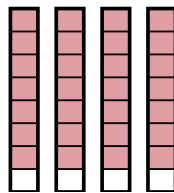
4)  $\frac{2}{3} \times 7 =$



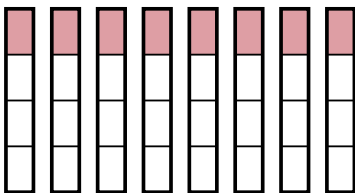
5)  $\frac{2}{3} \times 8 =$



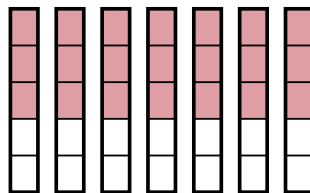
6)  $\frac{7}{8} \times 4 =$



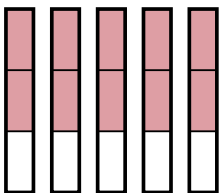
7)  $\frac{1}{4} \times 8 =$



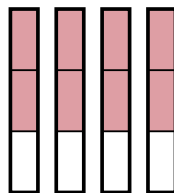
8)  $\frac{3}{5} \times 7 =$



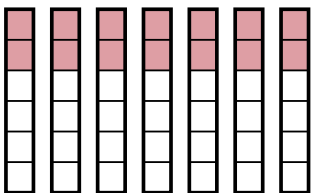
9)  $\frac{2}{3} \times 5 =$



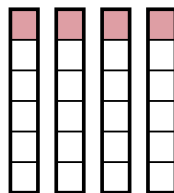
10)  $\frac{2}{3} \times 4 =$



11)  $\frac{2}{6} \times 7 =$



12)  $\frac{1}{6} \times 4 =$



**Answers**

1.  $\frac{3}{2}$

2.  $\frac{9}{5}$

3.  $\frac{35}{6}$

4.  $\frac{14}{3}$

5.  $\frac{16}{3}$

6.  $\frac{28}{8}$

7.  $\frac{8}{4}$

8.  $\frac{21}{5}$

9.  $\frac{10}{3}$

10.  $\frac{8}{3}$

11.  $\frac{14}{6}$

12.  $\frac{4}{6}$